

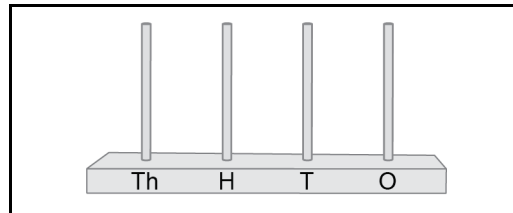
Handout**1 - 1**
Section 1**Enrichment****Abacuses**

- **Read** each expression in the left-hand column.
- **Represent** the number on the abacus in the centre column. **Regroup** numbers if you need to.
- **Write** the number in the right-hand column.

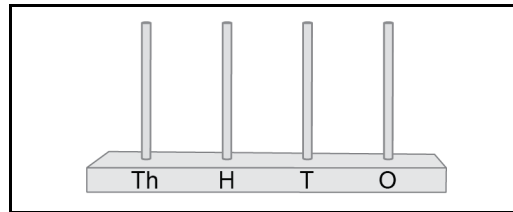
Remember:
you cannot put
more than 9 beads
on a wire.



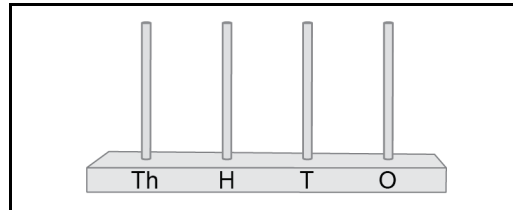
a) $5\text{ T} + 12\text{ O}$



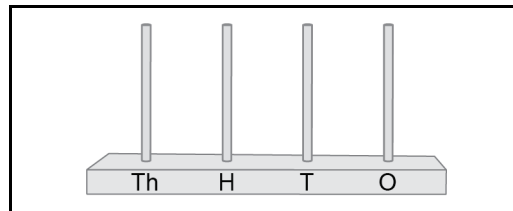
b) $18\text{ T} + 3\text{ H} + 24\text{ O}$



c) $36\text{ O} + 40\text{ T} + 4\text{ H}$



d) $5\text{ H} + 55\text{ O} + 55\text{ T}$



e) $27\text{ H} + 16\text{ O} + 9\text{ T}$

