







**Handout**

Enrichment

**ANSWER  
KEY****2 - 4**  
Section 12**Rectangular Representations**

Complete the table.

Example		3 rows of 5	$3 \times 5$	$5 + 5 + 5$
a)		6 rows of 7	$6 \times 7$	$7 + 7 + 7 + 7 + 7 + 7$
b)		4 rows of 6	$4 \times 6$	$6 + 6 + 6 + 6$
c)		4 rows of 8	$4 \times 8$	$8 + 8 + 8 + 8$
d)		7 rows of 3	$7 \times 3$	$3 + 3 + 3 + 3 + 3 + 3 + 3$
e)		5 rows of 9	$5 \times 9$	$9 + 9 + 9 + 9 + 9$