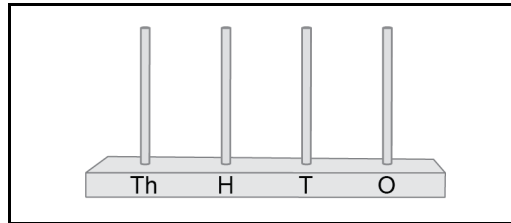


Handout**1 - 1**
Section 1**Enrichment****Abacuses**

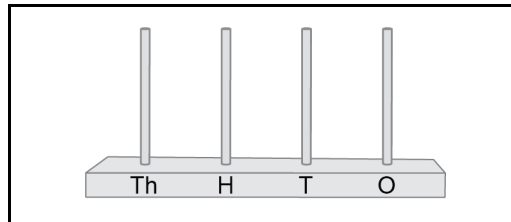
- **Read** each expression in the left-hand column.
- **Represent** the number on the abacus in the centre column. **Regroup** numbers if you need to.
- **Write** the number in the right-hand column.

Remember:
you cannot put
more than 9 beads
on a wire.

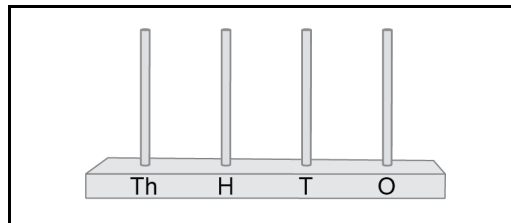
a) $6 \text{ Th} + 35 \text{ T} + 28 \text{ O} + 14 \text{ H}$



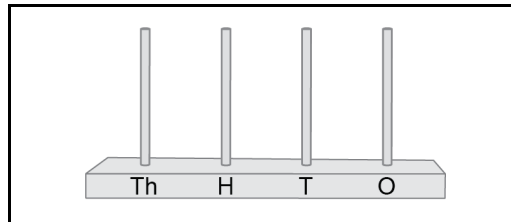
b) $279 \text{ O} + 1 \text{ Th} + 9 \text{ T} + 79 \text{ H}$



c) $1 \text{ Th} + 15 \text{ T} + 3 \text{ O} - 4 \text{ H}$



d) $5 \text{ Th} + 8 \text{ H} + 106 \text{ T} - 17 \text{ O}$



e) $60 \text{ H} + 160 \text{ T} - 9 \text{ O}$

